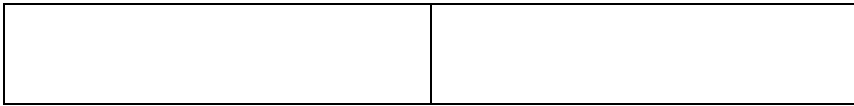




Label each part of the bar with the correct fraction.



$$1 \text{ whole} = \frac{\square}{\square}$$



$$1 \text{ whole} = \frac{\square}{\square}$$



$$1 \text{ whole} = \frac{\square}{\square}$$



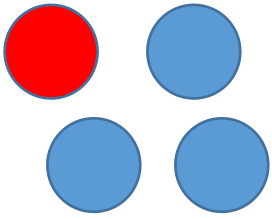
$$1 \text{ whole} = \frac{\square}{\square}$$



$$1 \text{ whole} = \frac{\square}{\square}$$



$$1 \text{ whole} = \frac{\square}{\square}$$

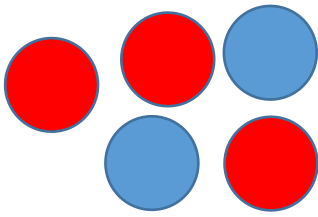


What fraction of the counters are red?

What fraction of the counters are blue?

What fraction would I give to the whole amount of counters?

$$\boxed{} + \boxed{} = \boxed{}$$

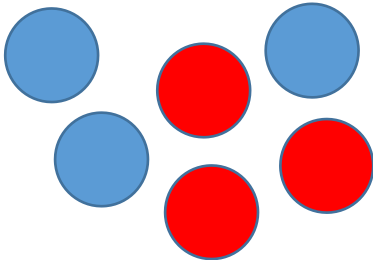


What fraction of the counters are red?

What fraction of the counters are blue?

What fraction would I give to the whole amount of counters?

$$\boxed{} + \boxed{} = \boxed{}$$

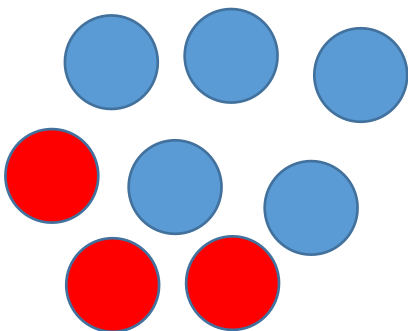


What fraction of the counters are red?

What fraction of the counters are blue?

What fraction would I give to the whole amount of counters?

$$\boxed{} + \boxed{} = \boxed{}$$




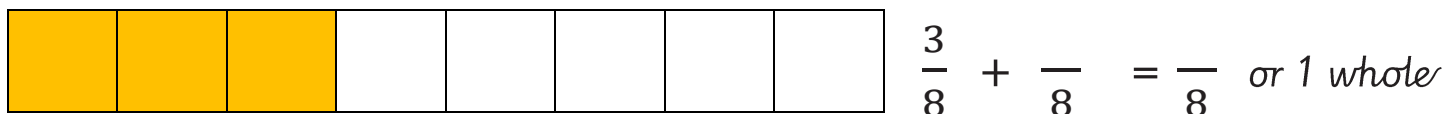

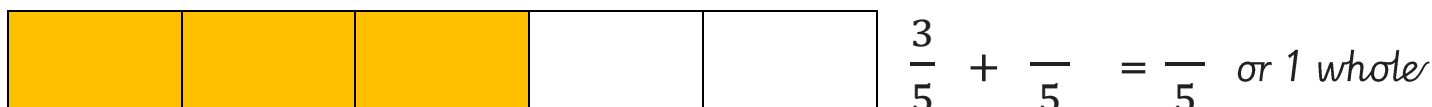
What fraction of the counters are red?

What fraction of the counters are blue?



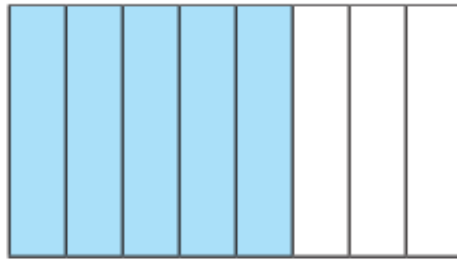

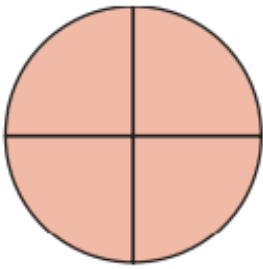
What fraction would I give to the whole amount of counters?

$$\boxed{} + \boxed{} = \boxed{}$$



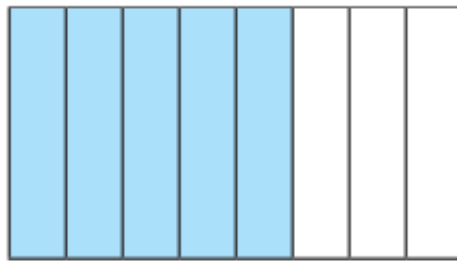

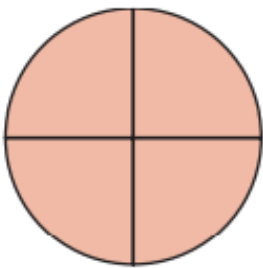
Finish the bar models so you have coloured in 1 whole.




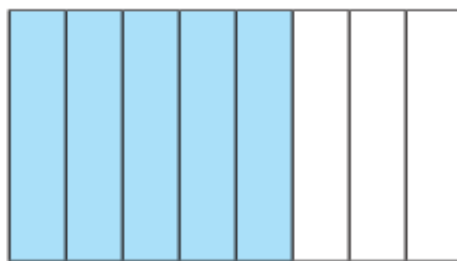

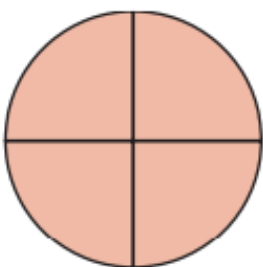
Tick the pictures that show fractions that are equal to 1 whole?



Tick the pictures that show fractions that are equal to 1 whole?



Tick the pictures that show fractions that are equal to 1 whole?



Complete the number sentences.

a) $\frac{3}{5} + \square = 1$

c) $\square = \frac{2}{7} + \frac{5}{7}$

b) $\square + \frac{4}{10} = 1$

d) $\frac{9}{9} = \square + \frac{5}{9}$

Complete the number sentences.

a) $\frac{3}{5} + \square = 1$

c) $\square = \frac{2}{7} + \frac{5}{7}$

b) $\square + \frac{4}{10} = 1$

d) $\frac{9}{9} = \square + \frac{5}{9}$

Complete the number sentences.

a) $\frac{3}{5} + \square = 1$

c) $\square = \frac{2}{7} + \frac{5}{7}$

b) $\square + \frac{4}{10} = 1$

d) $\frac{9}{9} = \square + \frac{5}{9}$

Complete the number sentences.

a) $\frac{3}{5} + \square = 1$

c) $\square = \frac{2}{7} + \frac{5}{7}$

b) $\square + \frac{4}{10} = 1$

d) $\frac{9}{9} = \square + \frac{5}{9}$

Complete the number sentences.

a) $\frac{3}{5} + \square = 1$

c) $\square = \frac{2}{7} + \frac{5}{7}$

b) $\square + \frac{4}{10} = 1$

d) $\frac{9}{9} = \square + \frac{5}{9}$