

Colour in the bar, adding 1 part every time and recording the fraction until you reach 1 whole.



\_\_\_\_\_



\_\_\_\_\_



\_\_\_\_\_




\_\_\_\_\_




\_\_\_\_\_



\_\_\_\_\_



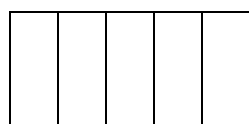
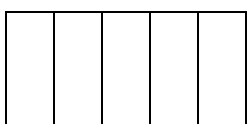
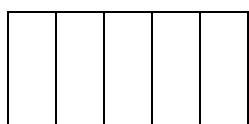
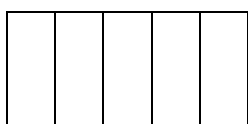
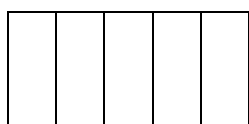
\_\_\_\_\_



\_\_\_\_\_



\_\_\_\_\_



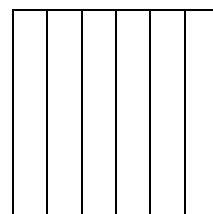
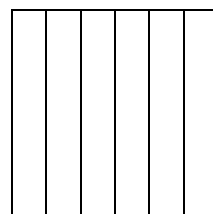

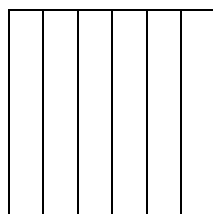
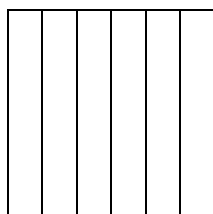
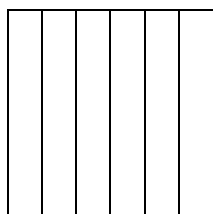
\_\_\_\_\_

\_\_\_\_\_

\_\_\_\_\_

\_\_\_\_\_

\_\_\_\_\_



\_\_\_\_\_

\_\_\_\_\_

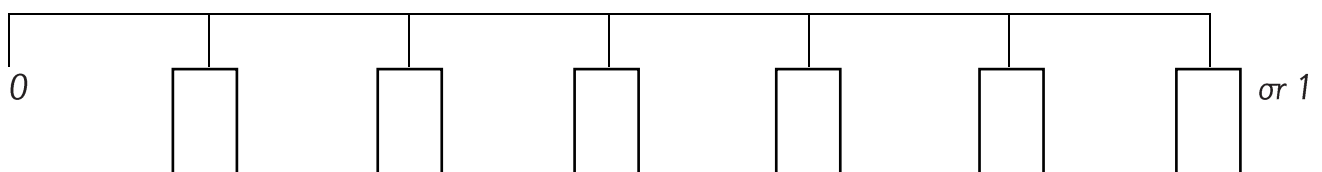
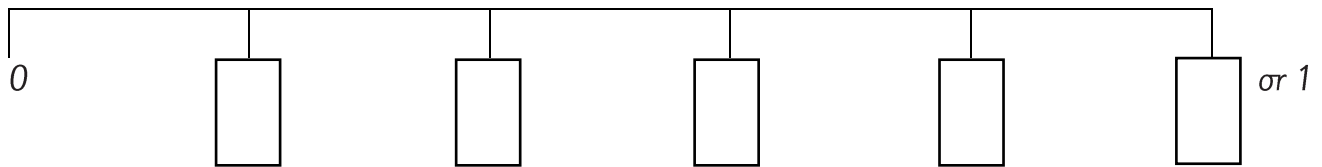
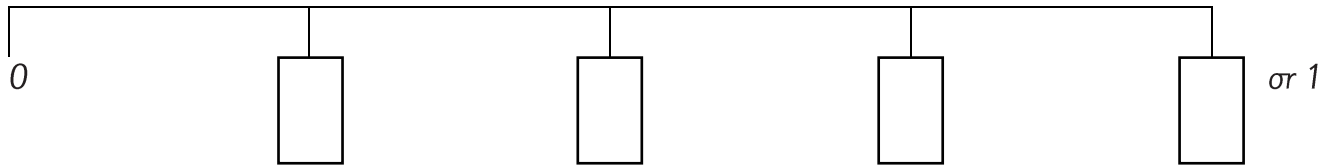
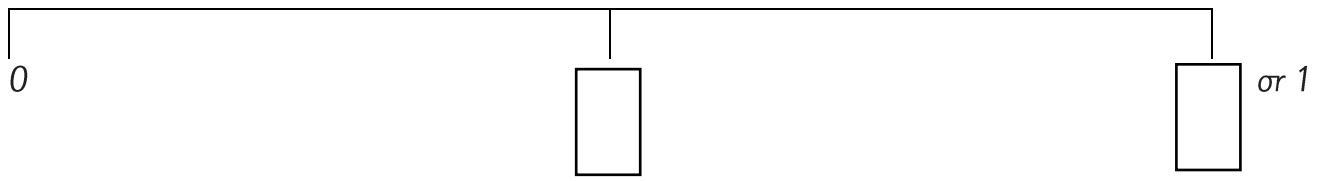
\_\_\_\_\_

\_\_\_\_\_

\_\_\_\_\_

\_\_\_\_\_

Record the fractions on the number line to get from 0 to 1.



*Place the fraction on the number line from 0 to 1.*

*Place  $\frac{1}{4}$  on the number line.*



*Place  $\frac{1}{3}$  on the number line.*



*Place  $\frac{1}{10}$  on the number line.*



*Place  $\frac{3}{4}$  on the number line.*



*Place  $\frac{2}{3}$  on the number line.*



*Place  $\frac{4}{5}$  on the number line.*



Write each fraction under the correct heading.

$\frac{2}{3}$

$\frac{4}{4}$

$\frac{5}{3}$

$\frac{1}{8}$

$\frac{3}{3}$

$\frac{3}{4}$

$\frac{7}{4}$

$\frac{8}{8}$

$\frac{7}{8}$

Less than one whole	Equal to one whole	More than one whole

Write each fraction under the correct heading.

$\frac{2}{3}$

$\frac{4}{4}$

$\frac{5}{3}$

$\frac{1}{8}$

$\frac{3}{3}$

$\frac{3}{4}$

$\frac{7}{4}$

$\frac{8}{8}$

$\frac{7}{8}$

Less than one whole	Equal to one whole	More than one whole