
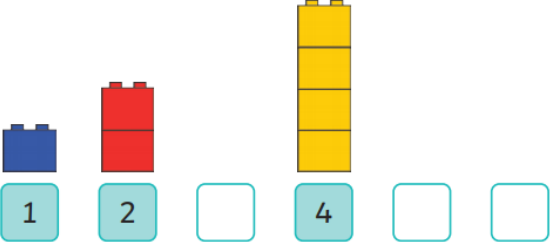
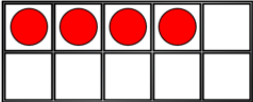
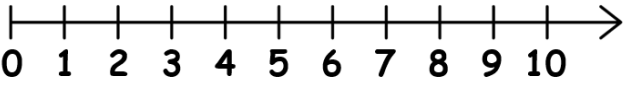
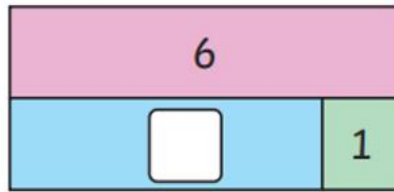


Maths Autumn Assessment 2020-21

1.	<p>How many apples?</p>  <input data-bbox="975 371 1102 472" type="text"/>	<input data-bbox="1278 454 1385 528" type="text"/> 1 mark
2.	<p>Draw the missing towers and write the missing numbers.</p> 	<input data-bbox="1278 902 1385 976" type="text"/> 1 mark
3.	<p>One more than  is <input data-bbox="1011 1126 1139 1227" type="text"/></p>	<input data-bbox="1278 1205 1385 1279" type="text"/> 1 mark
4.	<p>Find nine on the number line.</p> 	<input data-bbox="1278 1473 1385 1547" type="text"/> 1 mark
5.	<p>What symbol is missing? $4 = 3 \bigcirc 1$</p>	<input data-bbox="1278 1794 1385 1868" type="text"/> 1 mark

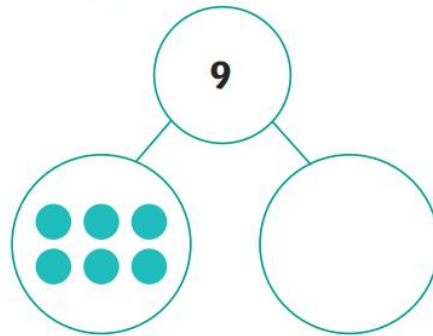
6.

Complete the bar models.


1 mark

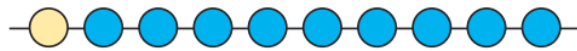
7.

Complete the part-whole model by filling in the empty circle.


1 mark

8.

Write a fact family to match the model.



$$\square + \square = \square$$

$$\square + \square = \square$$

1 mark

9.

Fill in the symbol to compare 2 ○ 3

1 mark

10.

$$6 + \underline{\quad} = 10$$

$$\underline{\quad} + 6 = 10$$

1 mark