

Answer these question by writing them and answering them in your book.

- | | |
|--|---|
| 1. $100 - 10 =$ | 2. $10 + \underline{\quad\quad} = 100$ |
| 3. $100 - 20 =$ | 4. $20 + \underline{\quad\quad} = 100$ |
| 5. $100 - 30 =$ | 6. $30 + \underline{\quad\quad} = 100$ |
| 7. $\underline{\quad\quad} + 40 = 100$ | 8. $100 - \underline{\quad\quad} = 60$ |
| 9. $\underline{\quad\quad} + 50 = 100$ | 10. $100 - \underline{\quad\quad} = 50$ |

Answer these question by writing them and answering them in your book.

- | | |
|--|---|
| 1. $100 - 10 =$ | 2. $10 + \underline{\quad\quad} = 100$ |
| 3. $100 - 20 =$ | 4. $20 + \underline{\quad\quad} = 100$ |
| 5. $100 - 30 =$ | 6. $30 + \underline{\quad\quad} = 100$ |
| 7. $\underline{\quad\quad} + 40 = 100$ | 8. $100 - \underline{\quad\quad} = 60$ |
| 9. $\underline{\quad\quad} + 50 = 100$ | 10. $100 - \underline{\quad\quad} = 50$ |

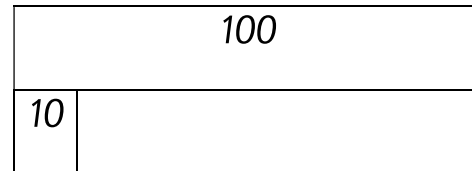
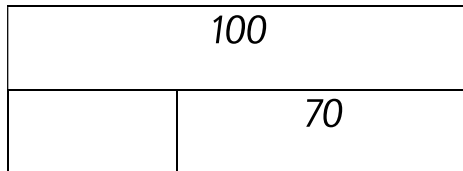
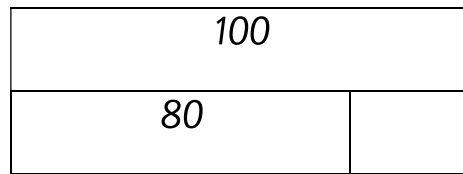
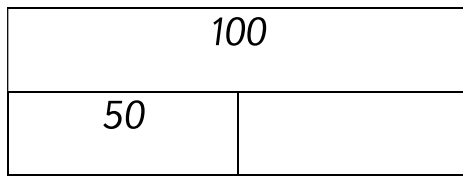
Answer these question by writing them and answering them in your book.

- | | |
|--|---|
| 1. $100 - 10 =$ | 2. $10 + \underline{\quad\quad} = 100$ |
| 3. $100 - 20 =$ | 4. $20 + \underline{\quad\quad} = 100$ |
| 5. $100 - 30 =$ | 6. $30 + \underline{\quad\quad} = 100$ |
| 7. $\underline{\quad\quad} + 40 = 100$ | 8. $100 - \underline{\quad\quad} = 60$ |
| 9. $\underline{\quad\quad} + 50 = 100$ | 10. $100 - \underline{\quad\quad} = 50$ |



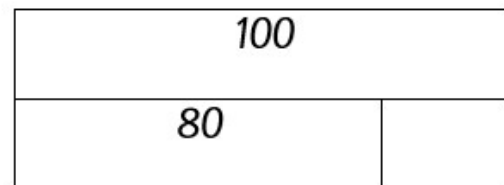

Answer these question by writing them and answering them in your book.

- | | |
|--|---|
| 1. $100 - 10 =$ | 2. $10 + \underline{\quad\quad} = 100$ |
| 3. $100 - 20 =$ | 4. $20 + \underline{\quad\quad} = 100$ |
| 5. $100 - 30 =$ | 6. $30 + \underline{\quad\quad} = 100$ |
| 7. $\underline{\quad\quad} + 40 = 100$ | 8. $100 - \underline{\quad\quad} = 60$ |
| 9. $\underline{\quad\quad} + 50 = 100$ | 10. $100 - \underline{\quad\quad} = 50$ |

Complete the bar models



Complete the bar models



Complete the bar models

