

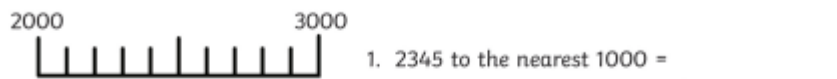
Friday Round to the nearest 1000

1. Take a look at the website <https://www.bbc.co.uk/bitesize/topics/zh8dmp3/articles/zpx2qty>
This will help you review rounding numbers to 1000


Then have a go at the following questions.

Rounding to the Nearest 1000

Can you round these 4-digit numbers to the nearest 1000? Use the number lines to help you.



1. 2345 to the nearest 1000 = _____



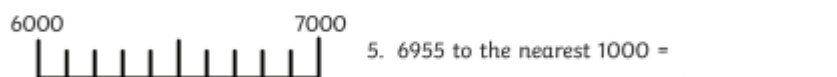
2. 3567 to the nearest 1000 = _____



3. 4812 to the nearest 1000 = _____




4. 5500 to the nearest 1000 = _____



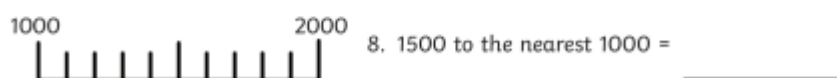
5. 6955 to the nearest 1000 = _____



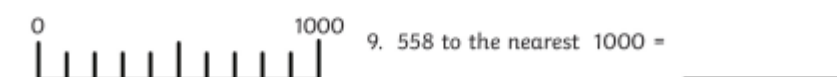
6. 8850 to the nearest 1000 = _____




7. 3310 to the nearest 1000 = _____



8. 1500 to the nearest 1000 = _____



9. 558 to the nearest 1000 = _____



10. 7321 to the nearest 1000 = _____

7 Round each number to the nearest 1,000

a) 3,500

h) 1,795

b) 749

i) 4,591

c) 2,260

j) 5,925

d) 2,360

k) 4,925

e) 2,460

l) 3,925

f) 2,560

m) 2,925

g) 2,660

n) 1,925