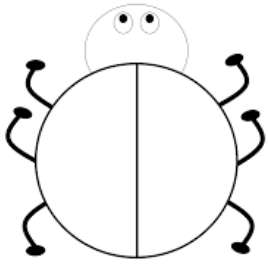
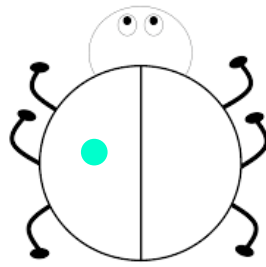


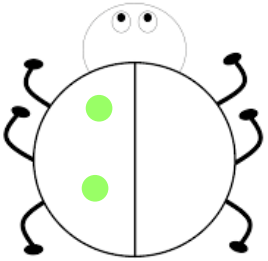
LO: Complete number bonds to 10 number sentences




$0 + \underline{\quad} = 10$



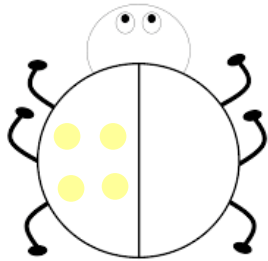
$1 + \underline{\quad} = 10$



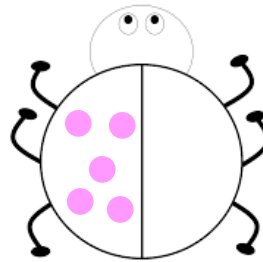
$2 + \underline{\quad} = 10$




$3 + \underline{\quad} = 10$



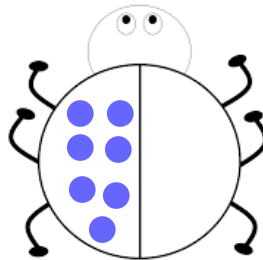
$4 + \underline{\quad} = 10$



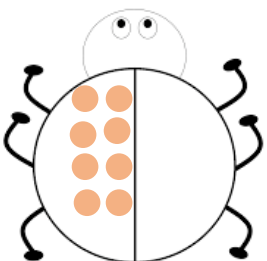
$5 + \underline{\quad} = 10$



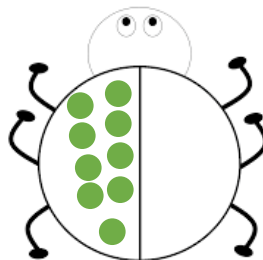
$6 + \underline{\quad} = 10$




$7 + \underline{\quad} = 10$



$8 + \underline{\quad} = 10$



$9 + \underline{\quad} = 10$



$10 + \underline{\quad} = 10$

Self assessment



Highlight the way you worked out the missing number.

- In my head
- Number line
- Counters
- Supported by teacher or teaching assistant

Extension: Roll a dice and then aloud say the number that completes the number bonds with a partner.